


**Lesson 81**1. Color  $\frac{1}{2}$  of the hearts.2.  $500 + 10 =$ 


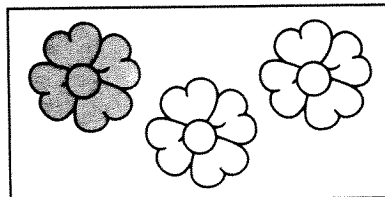
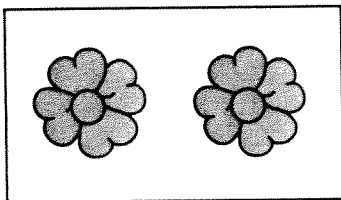
3. Before lunch, there are 28 cookies in Grandma's cookie jar. After lunch, there are only 19 cookies in Grandma's cookie jar. How many cookies were eaten at lunch?

\_\_\_\_\_ cookies were eaten at lunch.

4.  $22 + 59 =$ 5.  $450 - 10 =$ **Lesson 82**1.  $250 + 30 =$ 

2. Estimate to the nearest tens place. Tyler has 28 baseball cards. He gives away 12 of his cards. About how many cards does Tyler have left?

Tyler has about \_\_\_\_\_ baseball cards left.

3.  $12 - 9 =$ 4.  $300 + 60 =$ 5. Circle the picture that shows  $\frac{1}{2}$  of the flowers shaded.

**Lesson 83**

1. Nikki won 200 prize tickets at the fair on Friday and an additional 35 prize tickets at the fair on Saturday. How many prize tickets did Nikki win in all?

Nikki earned \_\_\_\_\_ prize tickets in all.


2. Estimate to the nearest tens place.

$88 - 26$  is about \_\_\_\_\_.

3. Color  $\frac{3}{4}$  of the lighthouses.

4.  $50 + 50 =$

5.  $18 + 17 =$

**Lesson 84**

1.  $32 - 18 =$

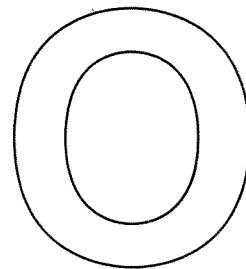

2. Jacob writes 27 letters while he is away at camp. He has 19 stamps. How many more stamps does Jacob need to mail all of his letters?

Jacob needs \_\_\_\_\_ more stamps to mail all of his letters.

3.  $210 + 10 =$

4.  $30 - 15 =$

5. Circle the picture that is not symmetrical.




## Lesson 85

- $70 - 55 =$
- $980 + 10 =$
- $130 - 10 =$
- Travon checked out 17 library books. Paul checked out 14 library books. How many library books did Travon and Paul check out altogether?

Travon and Paul checked out a total of \_\_\_\_\_ library books.

- Color  $\frac{1}{3}$  of the cats.



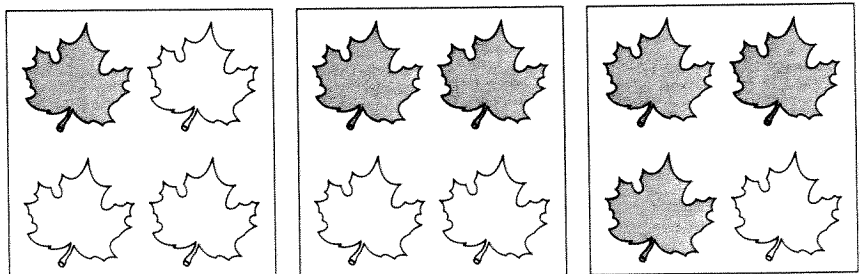
## Lesson 86

- Corin blows up 11 green balloons and 19 purple balloons for the school dance. How many total balloons does Corin blow up for the school dance?

Corin blows up \_\_\_\_\_ balloons for the school dance.

- $14 - 9 =$
- $35 + 15 =$
- $70 + 70 =$

- Circle the picture that shows  $\frac{1}{4}$  of the leaves shaded.



**Lesson 87**

1. Estimate to the nearest tens place.

$18 + 18$  is about \_\_\_\_\_.

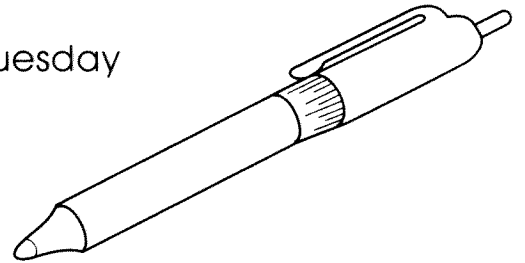
2.  $80 + 50 =$

3. Ms. Owen grades 33 papers on Monday and 19 papers on Tuesday. How many more papers did Ms. Owen grade on Tuesday than on Monday?

Ms. Owen graded \_\_\_\_\_ more papers on Tuesday than on Monday.

4.  $650 - 50 =$

5.  $75 + 25 =$

**Lesson 88**

1.  $260 + 20 =$

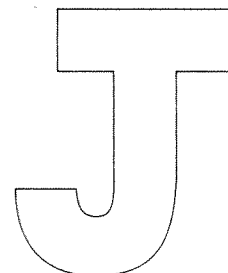
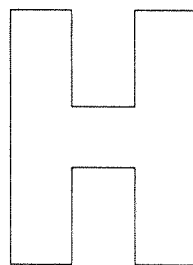

2.  $110 + 4 =$

3.  $370 - 40 =$

4. Eddie washes 26 shirts. He needs to fold 18 shirts. How many shirts does Eddie not need to fold?

Eddie does not need to fold \_\_\_\_\_ shirts.

5. Circle the letter that is symmetrical.




**Lesson 89**


- $119 - 4 =$
- Mary Ann counts 27 fireflies in her backyard. She catches 11 fireflies in a jar. How many of the fireflies is Mary Ann unable to catch?

Mary Ann is unable to catch \_\_\_\_\_ fireflies.

- $34 - 19 =$
- $212 + 3 =$
- Color  $\frac{3}{4}$  of the ice cream cones.

**Lesson 90**

- Circle the letter that is not symmetrical.



- $60 + 25 =$
- $60 - 25 =$
- Estimate to the nearest tens place.  $33 + 47$  is about \_\_\_\_\_.
- Mrs. Dalton buys 27 bottles of water for field day. Ms. Kay buys 36 bottles of water. How many bottles of water do Mrs. Dalton and Ms. Kay buy in all?

Mrs. Dalton and Ms. Kay buy \_\_\_\_\_ bottles of water in all.